






Name _____ Date _____

Equal Amounts of Money

Circle the correct number of coins that is equal to the amount on the right.

	₱ 1.00
	₱ 1.00
	₱ 5.00
	₱ 15.00
	₱ 20.00

Name _____ Date _____

Equal Amounts of Money

Circle the letter of the best answer.

- How many one-centavo coins would equal to one peso?
a. 1 b. 10 c. 100
- How many ten-centavo coins would equal to one peso?
a. 5 b. 10 c. 25
- How many 25-centavo coins would equal to one peso?
a. 10 b. 5 c. 4
- How many five-peso coins would equal to ₱100.00?
a. 10 b. 20 c. 50
- How many ten-peso coins would equal to ₱100.00?
a. 100 b. 10 c. 25
- How many 20-peso bills would equal to ₱100.00?
a. 5 b. 10 c. 20
- How many 50-peso bills would equal to ₱100.00?
a. 50 b. 4 c. 2
- If you have six 5-peso coins, how much money do you have?
a. ₱10.00 b. ₱25.00 c. ₱30.00
- If you have five 10-peso coins, how much money do you have?
a. ₱25.00 b. ₱50.00 c. ₱100.00
- If you have three 20-peso bills, how much money do you have?
a. ₱20.00 b. ₱50.00 c. ₱60.00