


Pangalan _____ Petsa _____

Itambal ang bilang sa pangalan nito.


☆	1	tatlo
☆☆	2	isa
☆☆☆	3	pito
☆☆☆☆	4	dalawa
☆☆☆☆☆	5	anim
☆☆☆☆☆ ☆	6	siyam
☆☆☆☆☆ ☆☆	7	lima
☆☆☆☆☆ ☆☆☆	8	sampu
☆☆☆☆☆ ☆☆☆☆	9	apat
☆☆☆☆☆ ☆☆☆☆	10	walo

Pangalan _____ Petsa _____

Itambal ang bilang sa pangalan nito.




◀ anim



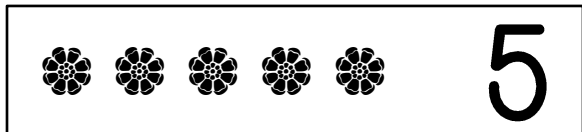
◀ isa




◀ tatlo




◀ dalawa




◀ pito




◀ siyam




◀ lima



◀ apat



◀ sampu



◀ walo

Pangalan _____ Petsa _____

Bilangin ang mga bulaklak sa bawat kahon.
Bilugan ang tamang bilang ng mga bulaklak.


	3	6	5
---	---	---	---

	4	8	2
---	---	---	---


	10	9	7
---	----	---	---


	4	6	5
---	---	---	---


	6	9	8
---	---	---	---

	8	7	5
---	---	---	---

	3	2	1
---	---	---	---

	9	7	10
---	---	---	----

	4	5	6
---	---	---	---

	6	8	7
---	---	---	---

Pangalan _____ Petsa _____

Bilangin ang mga hayop sa bawat kahon.
Bilugan ang tamang bilang ng mga hayop.

